

# NEW AL WUROOD INTERNATIONAL SCHOOL, JEDDAH

(PEEVEES SCHOOLS, K.S.A.)

Affiliated to CBSE – New Delhi



## EVALUATION - 3 (2016 – 2017)

Subject: Social Science

Invigilator's Signature

Date: 07-03-17

Set: A

Time: 2 Hours

Class: 4 Sec: \_\_\_\_\_

Max.Marks: 50

Name: \_\_\_\_\_

Roll No. : \_\_\_\_\_

SECTION	A	B	C	D	TOTAL MARKS
MAX.MARKS	12	15	23	-	50
MARKS OBTAINED					
MARKS AFTER SCRUTINY					

Examiner's Signature

Scrutinizer's Signature

### Instructions to the Candidates:

1. Please check that this question paper contains all the printed pages.
2. All answers must be written in the space provided.
3. Write neatly and legibly.
4. Do not leave the examination hall without handing over the answer paper to the invigilator.

## SECTION-A

### I. Choose the correct answer from bracket

(3)

1. Places where fish are kept to hatch eggs  
(a. Fisheries b. Industry c. Poultry d. Small scale)
2. Cane basket is an example of -----  
(a. Cottage industry b. small scale industry c. large scale industry d. Cottage & Large scale)
3. ----- founded the Sikh religion.  
( a. Mahavira, b. Guru Nanak c. Gautama Buddha d. Pandita Ramabai.)
4. Write the correct industry for making computer  
(a. Cottage, b. large scale, c. Small scale d. Small Scale and Large Scale)
5. We use----- to climb up a hill  
(a. Mule b. Camel c. Scooter d. Elephant)
- 6...The Indian Army is trying to help people trapped because of a flood in Mayapur Village. It should use \_\_\_\_\_ to reach there.  
(a. Cable cars b. Helicopters. c. Hot air balloons d. None)

### II. Write whether True or False:

(3)

1. C.V. Raman was a famous singer.
2. Buddha founded the Jain religion.
3. Ferry is a bus to carry people across short distance.
4. A canal is a waterway made by people for ships to pass.
5. Yak is an animal with long hair and horns found in the desert.
6. Air transport is the fastest of all transport.

**III. Match the following:**

(3)

- |                      |   |                               |
|----------------------|---|-------------------------------|
| 1. Rubber sandals    | - | Raft                          |
| 2. Super-fast Trains | - | To travel across a desert     |
| 3. Water Transport   | - | Small scale industry          |
| 4. Jute              | - | Bullet Trains                 |
| 5. Truck             | - | Cash Crop                     |
| 6. Camel             | - | To carry things long distance |

**IV. Fill in the blanks:**

(3)

1. Crops such as rice, wheat, pulses and millets are called ----- crops.
2. Gautama Buddha's real name was -----
3. ----- was the earliest type of aircraft.
4. In earlier times, we only had ----- roads
5. We use a ----- ship to carry other things
6. The ----- started the railways in India in 1853.

**SECTION -B**

**V. Answer the following in a sentence each:**

(5 X 1 = 5)

1. Ramu is a farmer in a village. He plans to move to a city. Can he continue to be a farmer? Why or why not?

---

---

2. Write one sentence about Mahavira.

---

3. Write about a problem that cement roads have and mud roads don't.

---

---

4. Besides travelling to different countries and cities, where else can we travel by air?

---

---

5. Write 3 things that you eat which come from plants?

---

---

**VI. Identify the pictures and write two sentences about each:**

(5x 2 = 10)

1. \_\_\_\_\_

---

---


---

---

---

---

---




2. \_\_\_\_\_

---

---

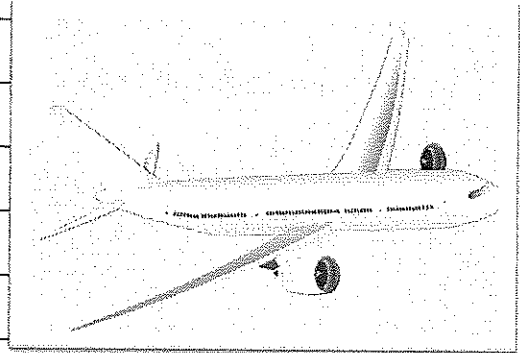
---




3.



4.



5.



## SECTION-C

**VII. Answer the following questions in three or four sentences each (5 x 3 = 15)**

1. What will you see in a train station?

---

---

---

---

---

---

---

---

---

---

2. Describe different types of road vehicles and what they are used for?

---

---

---

---

---

---

---

---

---

---

3. What would have happened if there were no industries?

---

---

---

---

---

---

---

---

4. What will be different in travelling on a mud road and a cement road? What is same between the two types of roads?

---

---

---

---

---

---

---

---

---

---

5. Name four food crops and four cash crops. Write one difference between them.

---

---

---

---

---

---

---

---


---

---


**VIII. Answer the following questions**

**(2X 4 = 8)**

1. Look at the pictures and answer the questions.



**Picture a: Auto Rickshaw**



**Picture b: Fruit Cart**

Write down two differences between the two transports in the pictures.

2 differences	Picture a: Auto Rickshaw	Picture b: Fruit Cart
1 use of the transport		
What makes it move		


2. Choose the correct option from the help box to describe each statement.

Poultry Farming; Small Scale Industry; Sea voyage; Steamer



- a) Keeping chickens, hens and ducks for egg and meat: \_\_\_\_\_
- b) Christopher Columbus discovered America: .\_\_\_\_\_
- c) Small ship or big boat that moves with steam engine \_\_\_\_\_
- d) Producing small goods using small machines: \_\_\_\_\_

\*\*\*\*\*



22