



EVALUATION-3, 2017-18
GRADE: 3
WORKSHEET-2
SUBJECT: MATHEMATICS

I. Choose the correct answer:

- (1) $25 \div 5 =$ _____. (1, 5, 10)
(2) The last month of the year is _____.
(December, November, January)
(3) You sleep for _____. (seconds, hours, days)
(4) The fraction $\frac{1}{2}$ is read as _____. (double, 1 whole, half)

II. Fill in the Blanks:

- (1) $26 \div 1 =$ _____.
(2) There are _____ days in the month of March.
(3) 1 hour after 5:45, the time will be _____.
(4) Ram distributes 12 pencils among 6 children. Each child gets _____ pencils.

III. Match the following:

Double of 15	12 months
Shopping	15
Denominator of $\frac{9}{15}$	30
Year	Hours

IV. True or False :

- (1) 2008 was a leap year.
- (2) For the time 7:15 on a clock, the minutes hand will be on 9.
- (3) There are 4 months in a year, having only 30 days.
- (4) $0 \div 12 = 12$

V. Answer the following:

- (1) Write a story problem for : $50 \div 10 = 5$
- (2) Neha has 9 apples. She gave 5 apples to her brother. What fraction of apples did she give her brother?
- (3) Solve using repeated subtraction :


(a) $16 \div 4$

(b) $72 \div 8$


- (4) Draw a timeline for Carrie.

Carrie was born in 2004 - she learned to walk in 2005 - started to speak in 2006 - joined school in 2008 - learned to paint in 2009 - received prize in painting competition in 2010.


- (5) Read the clock and write the time in two different ways:



(a)



(b)



Be checked
[Signature]