

AL-KHOZAMA INTERNATIONAL SCHOOL, DAMMAM



(PEEVEES GROUP OF SCHOOLS, K.S.A.)

Affiliated to CBSE – New Delhi.

WORKSHEET _ 1 BLOCK 13 2018-2019

Subject: MATHEMATICS

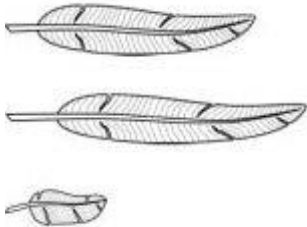
Date:

Name: _____ **Class: I Sec:** _____


1. Fill in the blanks.

1. _____ tells us how long something is.
2. _____ tells us how tall or short something is.
3. A _____ is the length from the toe to the heel.
4. A _____ is the width of the tip of the first finger.
5. A _____ is the length from the tip of the middle finger to the elbow.

2. Circle the longest leaf and underline the shortest leaf.



3. Colour the tallest ladder with blue and shortest ladder with red.



WORKSHEET _ 2 BLOCKS 13

Subject: MATHEMATICS

Date: _____

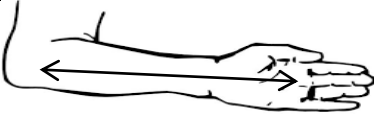
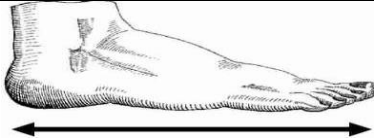


Name: _____

Class: I Sec: _____

1. How many blocks equals to the length of these sea animals? Write the answer in each box.



2 . Match the following.

1		Foot
2		Cubit
3		Handspan
4		Digit