



AL KHOZAMA INTERNATIONAL SCHOOL, DAMMAM

Affiliated to CBSE – New Delhi


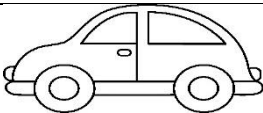


Subject: EVS- Block 11
REVISION WORKSHEET

Name: _____ Class: 1 Sec: _____ Date: _____




I. Write True or False.

1. Living things need food - _____
2. Pencil can breathe - _____
3. Plants also move - _____

II. Complete the table.

Thing	Does it move on its own?	Does it breathe?	Does it have babies?	Is it Living or Non Living thing?
				
				
				
				

III. Circle the living things. Why do you think it is living?



IV. Answer the following.

1. When a plant dries up, why do we called it “dead” and “non-living”?

2. Name any 2 Non-Living things that can move.
