

NEW AL WUROOD INTERNATIONAL SCHOOL, JEDDAH

(PEEVES SCHOOLS, K.S.A.)

Affiliated to CBSE – New Delhi



EVALUATION - 3 (2016 – 2017)

Subject: Mathematics

Invigilator's Signature

Date: 01/03/17

SET A

Time: 2 hrs.

Class: 2 Sec: _____

Max. Marks: 50

Name: _____

Roll No.: _____

SECTION	A	B	C	D	TOTAL MARKS
MAX.MARKS					50
MARKS OBTAINED					
MARKS AFTER SCRUTINY					

Examiner's Signature

Scrutinizer's Signature

Instructions to the Candidates:

1. Please check that this question paper contains all the printed pages.
2. All answers must be written in the space provided.
3. Write neatly and legibly.
4. Do not leave the examination hall without handing over the answer paper to the invigilator.

I. **Choose the correct option:-**

(6x1=6marks)

- a) The answer in addition is called
(a)Difference (b) Sum (c) Product
- b) The amount of liquid a container can hold is called
(a) length (b) weight (c) capacity
- c) How many main seasons are there in India?
(a) 5 (b) 4 (c) 3
- d) A way of organizing days, weeks and months of a year is called
(a) Culture (b) calendar (c) tradition
- e) A graph displays data using picture is called
(a)Line plot (b) Block graph (c) Pictograph
- f) $13 + \underline{\hspace{2cm}} = 25$
(a) 12 (b) 14 (c) 15

II. **Fill in the blanks: -**


(8x1=8marks)

- a. English Calendar has _____ days in a year.
- b. A leap year has _____ days in February.
- c. The numbers being added are called _____
- d. The process of taking away a part of something is called _____
- e. _____ are used for counting in groups of 5.
- f. A _____ uses X's marks for displaying data on a number line.
- g. A week has _____ days
- h. A group of people sharing the same languages, tradition is called _____

III. Add the following by expanding:-

(1x2=2 marks)


$$22 + 15$$



IV. Add the following using place value blocks:-

(1x2=2 marks)

$$40 + 18$$



V. Write True or False for the following:-

(3x1=3marks)

a) The capacity of a bucket can be measured using a mug. (_____)

b) A spoon holds 15 cups of water. (_____)

c) Bottle A holds 5 glasses of water and bottle B holds 8 glasses.

So, bottle A can hold 4 cups of water more than bottle B. (_____)

VI. The capacity of a bucket is 18 mugs. The capacity of a tub is 25 mugs. Which holds more water and by how much?

(1x3=3marks)

VII. Subtract the following :-

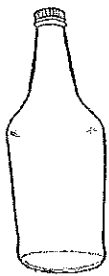
(2x1=2marks)

a)
$$\begin{array}{r} 79 \\ - 8 \\ \hline \end{array}$$

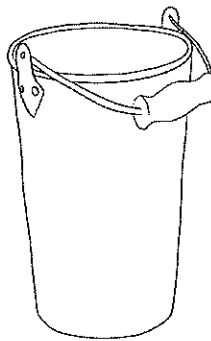
b)
$$\begin{array}{r} 54 \\ - 27 \\ \hline \end{array}$$

VIII. Arrange the following objects from greatest to smallest:-

(2x1=2marks)



A



B



C



D

IX. Add the following numbers:-

(3x1=3marks)

a)
$$\begin{array}{r} 24 \\ + 18 \\ \hline \end{array}$$

b)
$$\begin{array}{r} 35 \\ + 25 \\ \hline \end{array}$$

c)
$$\begin{array}{r} 19 \\ + 17 \\ \hline \end{array}$$

X. Name the months that have 30 days.

(2x1=2marks)

Ans. _____

XI. Which is the **first month** of the year in **Islamic Calendar**?

(1x1=1mark)

Ans. _____

XII. There are 58 kites in a shop. 29 are Red. How many kites are not Red? (2x1=marks)

Ans.

XIII. Read the following Calendar and answer the following question:- (5x1=5marks)

August 2016

Sunday	Monday	Tuesday	Wednesday	Thursday	Friday	Saturday
	1	2	3	4	5	6
7	8	9	10	11	12	13
14	15	16	17	18	19	20
21	22	23	24	25	26	27
28	29	30	31			

a) What is the month and the year shown in Calendar?

Ans. _____

b) How many Sundays are there in the month?

Ans. _____

c) If 25th August is Thursday, what day will be tomorrow?

Ans. _____

d) How many days are there in this month?

Ans. _____

e) Independence Day is on 15th of August, which day is it?

Ans. _____

XIV. Make a Line Plot for the following information:-

(5x1=5marks)

DAYS	No. of Cars Sold
MONDAY	4
TUESDAY	8
WEDNESDAY	6
THURSDAY	5
FRIDAY	3

XV. Read the given table below and answer the following questions:- (4x1=4marks)

Colours	No. of Students
RED	7
BLUE	10
GREEN	12
YELLOW	6
ORANGE	5

a) Which colour is liked the most?

Ans. _____

b) Which colour is the least one?

Ans. _____


c) How many children like the blue colour?

Ans. _____

d) How many children like Red more than Orange?

Ans. _____

******BEST OF LUCK******



Moumita Biswas
M.B.
19/02/17
.