

NEW AL WUROOD INTERNATIONAL SCHOOL, JEDDAH, K.S.A



Affiliated to CBSE – New Delhi

**REVISION WORK SHEET -1 {BL 18, 20}**  
**GRADE: 1**  
**EVALUATION-3, 2017-18**  
**SUBJECT: MATHEMATICS**

Name : \_\_\_\_\_

Date: \_\_\_\_\_

**Q.1. Write the missing numbers.**

A. 16		19			22		24		
B. 45			48			51			54

**Q.2. Write the number names**

34	
67	
90	

**Q.3. Write the numbers from smallest to biggest.**

Smallest      bigger      biggest

A. 67, 89, 99                 

Smallest      bigger      biggest

B. 56, 73, 20                 


**Q.4.**

A. What is one less than 83? .....


B. What is one more than 59? .....

C. What is one less than 100? \_\_\_\_\_


Q.5. There are 8 pencils and 2 scissors. How much stationary in all? \_\_\_\_\_



Q.6. There are 3 squirrels, 4 puppies and 2 elephants in a zoo. How many animals are there in all? \_\_\_\_\_




Q.8. Draw a story problem to show  $9 + 3 = 12$  with the help of pictures.



Q.9. Complete the story problems using pictures.

A. There are \_\_\_\_\_ flowers and \_\_\_\_\_ stars. How many in all?



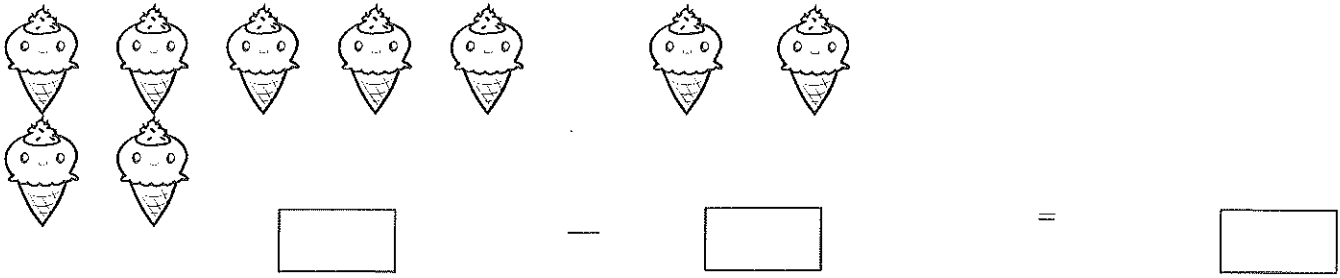
+



=



B. There are \_\_\_\_\_ ice creams. \_\_\_\_\_ ice creams are eaten. How many are left?

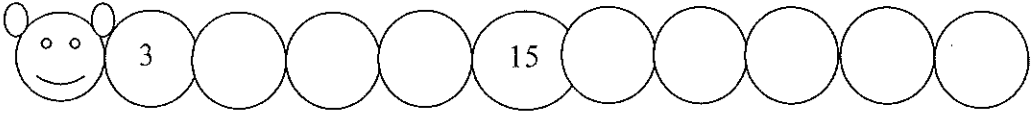


Q.10. Write tens and ones for the given number.

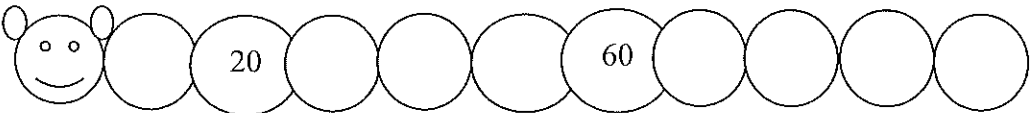
A. 97 = \_\_\_\_\_ tens and \_\_\_\_\_ ones.

B. 43 = \_\_\_\_\_ tens and \_\_\_\_\_ ones.

Q.11. Skip count by 3's





Q.12. Skip count by 10's



Q.13 Write story problems using pictures and facts:

A.  $11 + 4$

B.  $15 - 2$



مدرسة الورود الحديثة العالمية  
 قسم البنات  
 تحت إشراف وزارة التعليم  
 ٢٠٢١ م  
 NEW AL WUROOD INTL SCHOOL, JEDDA  
 Affiliated to CBSE New Delhi  
 Registration No. 5736009

checked.

~~SM~~  
11/2/18