

AL KHOZAMA INTERNATIONAL SCHOOL, DAMMAM  
B.E.S.T. Group of Schools, K.S.A.



Affiliated to CBSE – New Delhi, Affiliation No: 5730019

**REVISION WORKSHEET-2**

**GRADE:3 Mathematics (Block 24 &25)**

**1. Fill in the blanks:**

- There are \_\_\_\_\_ weeks in a year
  - There are \_\_\_\_\_ months with 31 days
  - There are \_\_\_\_\_ days in a leap year
- Name the months that have 30 days?
  - Make a calendar for February 2019 if January 2019 ends with Thursday?

February 2019

S	M	T	W	T	F	S

**4. Make a timeline to show the different festivals for the year 2019?**

Holi- March, Pongal – January , Diwali – October, Id – e-Milad - June, Christmas – December, Gandhi Jayanthi – October.

5.

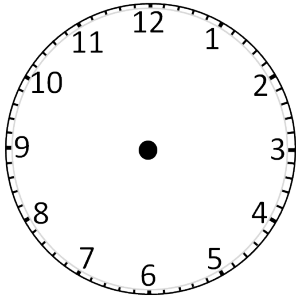
2019 JANUARY						
SUN	MON	TUE	WED	THU	FRI	SAT
		1	2	3	4	5
6	7	8	9	10	11	12
13	14	15	16	17	18	19
20	21	22	23	24	25	26
27	28	29	30	31		

- Republic day was on January 26<sup>th</sup>, 2019, what day was it? \_\_\_\_\_
- How many Thursdays does January 2019 have? \_\_\_\_\_

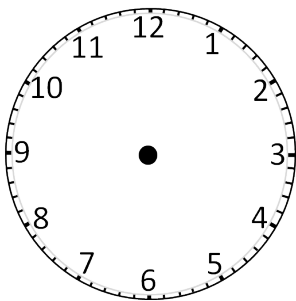
C) What day of the week is January 19<sup>th</sup>, 2019? \_\_\_\_\_

6. Draw the hour hand to show the given time?

A) 3:00



B) 12'0 clock



7. Write the given time in two different ways?

A) Eleven forty-five

B) Eight fifteen

8. List three things that you can do in about an hour?

9. Give one activity that you can do at the given time?

A) 10:00 PM

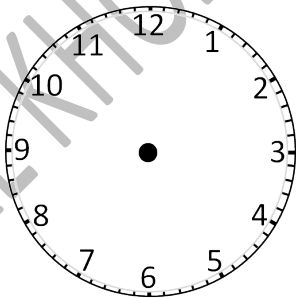
B) 7:00 AM

C) 6:30 PM

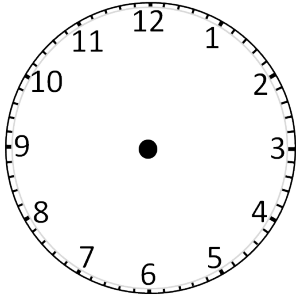
10. What time will it be 3 hours after 2:15?

11. Draw the minutes and hour hand for the given time?

A) 6:30



B) 2:15



12. Where would the minutes and hour hand be for the given time?

A) 6:30

B) 7:45

13. Draw analogue clock to show the time



AL KHOZAMA INTERNATIONAL SCHOOL