



AL KHOZAMA INTERNATIONAL SCHOOL, DAMMAM
Affiliated to CBSE – New Delhi

Subject: EVS- Block 11
REVISION WORKSHEET

Name: _____ Class: 1 Sec: _____ Date: _____

I. Fill in the blanks:

1. The things around us can be grouped into _____ and _____ things.
2. Living thing that has two legs and two hands _____.
3. All living things need _____ to live.

II. State True or False.


1. Plants move towards sunlight _____
2. Non-living things grow _____
3. Tree is a living thing _____

III. How do these things move? Match the following:



A.

a. Battery

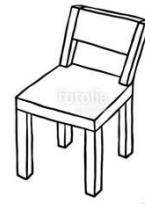


B.

b. Air

C. Are they living things? _____

IV. Answer the following:



1. Is chair a living thing or a non-living thing? Why?

V. DRAW AND COLOUR ANY TWO LIVING THINGS:

A large empty rectangular box with a thin black border, intended for drawing and coloring two living things. The box is positioned in the lower half of the page, below the section header. It is completely blank, providing space for a student's artwork.





AL KHOZAMA INTERNATIONAL SCHOOL, DAMMAM
Affiliated to CBSE – New Delhi

EVALUATION-1, (2018-2019)

Subject: EVS
REVISION WORKSHEET BL-13

Name: _____ Class: 1 Sec: _____ Date: _____

I. Complete the table:

Animal home	Name of the animal home	Animal that lives here
		
		

II. Fill in the blanks:

1. Fishes live in _____.
2. Animals need homes to _____ themselves.
3. An animal that lives both on land and water _____.

III. State True or False:

1. Tiger lives in water _____
2. Turtles have a shell on their body _____
3. Animals that stay with us are called domestic animals _____

IV. Answer the following:

1. Why can't a snake and a rat live in the same hole?

2. Why do elephants like to play in water?

V. Draw the home of a lion:





AL KHOZAMA INTERNATIONAL SCHOOL, DAMMAM
Affiliated to CBSE – New Delhi

EVALUATION-1, (2018-2019)

Subject: EVS
REVISION WORKSHEET BL-15

I. Fill in the blanks:

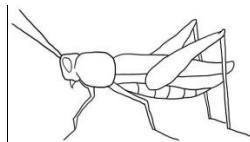
1. Insects have _____ pairs of legs.
2. _____ help the insects to fly.
3. Drains and gutters are homes of _____.

II. Answer the following:



1. Is the animal in the picture an insect? Why or why not?

2. Why does the grasshopper eat grass and not suck nectar from flowers?



III. Complete the table:

Insect	Home of the insect
