



REVISION WORKSHEET -1



GRADE: 2

EVS (Block 19 &20)

1. Fill in the blanks with the correct words:

- a) Gentle wind is called a _____.
- b) We can see the _____ in the day sky as well as in the night sky.
- c) Moving air is called _____.

2. Name the picture.

- a)  _____
- b)  _____




3. True or False

- a) The sun sets in the north.
- b) Windsock points in the same direction as the wind.
- c) Moon has light of its own.

4) Match the statements with the clouds

		
Heavy rain with thunder	Can expect rain	Normal weather

5. Tick if they can be seen in the sky during day or night?

Day	In the sky	Night
		
		
		

6. Write any 3 uses of winds.

7. Circle the picture that is moved by the wind.

