



(PEEVEES GROUP OF SCHOOLS, K.S.A.)

Affiliated to CBSE – New Delhi.

WORKSHEET _ 1 BLOCK 11 2018-2019

Subject: MATHEMATICS

Date:

Name: _____ Class: I Sec: _____

1. Fill in the blanks.

1. Difference is the answer we get after _____.
2. A fact family has _____ numbers.
3. From a fact family we get _____ addition facts and _____ subtraction facts.
4. $4-0 =$ _____.
5. $5-1 =$ _____.
6. $3-3 =$ _____.

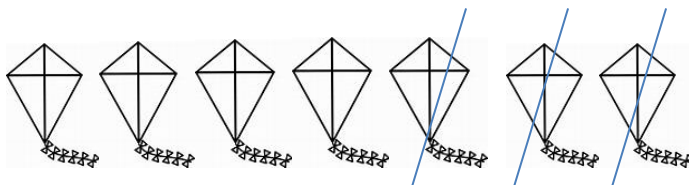
2. Find the difference.

a)



$$\underline{\quad} - \underline{\quad} = \underline{\quad}$$

b)



$$7-3 = \underline{\quad}$$

WORKSHEET _ 2 BLOCK 11

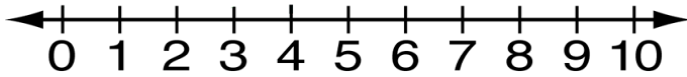
Subject: MATHEMATICS

Date: _____

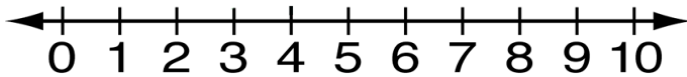
Name: _____ Class: I Sec: _____

1 . Find the difference.

a) $10-3 =$ _____.



b) $10-6 =$ _____.



2 . Write 2 addition facts and 2 subtraction facts using the fact family .

a) 3, 4, 7

Addition Facts	Subtraction Facts

b) 3, 2, 1

Addition Facts	Subtraction Facts