



**WORK SHEET - 1**  
**GRADE: IV**  
**EVALUATION-3**  
**SUBJECT: MATHEMATICS**

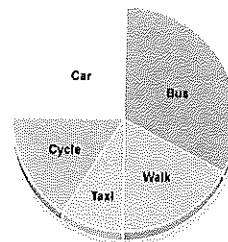
**I. Choose the correct option:**

1) Half an hour is made of

(30 minutes , half minute, 15 minutes, half day)


2) In the Circle chart, which is the least mode that people use to reach office

(Bus , walk , taxi , walk)



3) The time indicated in the clock is

(8:42 9:42 8:22 9:22)



4)  $\frac{1}{6} + \frac{4}{6} =$  \_\_\_\_\_

(  $\frac{3}{6}$  ,  $\frac{5}{6}$  ,  $\frac{5}{12}$  ,  $\frac{3}{12}$  )

5)  $60 \square =$  \_\_\_\_\_ Paise

(650 , 6000 , 600 , 60 )

**II. Fill in the blanks:**

1) The fractions with the same denominator are called \_\_\_\_\_

2) \_\_\_\_\_ is a graph that uses pictures to display information.

3) Quarter past 8 can be written as \_\_\_\_\_.

4)  $\frac{7}{7} = \frac{1}{7} + \frac{5}{7} +$  \_\_\_\_\_.

5) A fraction where numerator is smaller than the denominator is called \_\_\_\_\_.

6)  $\frac{6}{8}$  and  $\frac{3}{4}$  are called \_\_\_\_\_ fractions.

**Solve the following:**

1) Write the next four equivalent fractions


$\frac{4}{10}$  \_\_\_\_\_, \_\_\_\_\_, \_\_\_\_\_, \_\_\_\_\_

2) Convert the following mixed fractions to improper fractions

a)  $2\frac{4}{5}$  \_\_\_\_\_

b)  $3\frac{2}{7}$  \_\_\_\_\_

3) Read the time and write in 2 different ways.



4) . Complete the table.

Marks scored	Number of students	Tally marks
45	20	
63	33	
72	19	
80	24	

5) Mrs. Anitha bought a large pizza. A large pizza has 12 slices.

If her daughter, Akshaya ate two slices, what fraction of the pizza was left?

6) Make a pictograph for the data. Key:1 picture=1 student

Favorite color	Pink	Red	Blue	Green
Students	5	7	3	10

7) Arrange the given activities of Mr. Zain in order on a timeline

Activity	Time
Wake up	5:30 in the morning
Gym	7:15 in the evening
Office	8:00 in the morning
Bed time	10:30 in the night

8) Write the different notes and coins used to make the given amount


- a) □ 413      b) □ 196      c) □ 425      d) □ 77

9) Make a Bar graph using an appropriate scale.

Player	Kiran	Shweta	Diya	Rita
Goals scored in a year	45	25	30	15

10) Ashish practices for his tennis every day for 4 hours 15 minutes and finishes it at 11:30 PM. What time does he start his practice ?

\*\*\*\*\*



Checked.

11/2/17