



Subject: MATHEMATICS

Class-2

WORKSHEET – 1

Block 20,22 and 25

I. Fill in the blanks

- i) The method of adding two numbers is called as _____
- ii) We count money in _____ and _____
- iii) 1 Rs = _____ Paise
- iv) $15 + \underline{\quad} = 27$
- v) The symbol of rupees is _____.

II. Solve using Column method.

$67 + 35 =$	$55 - 45 =$
-------------	-------------

III. Identify the notes and coins:



i)



ii)



iii)




iv)


IV. Solve the following Story Problems.

a) My brother has rupees 60 and I have rupees 25. How many rupees do we have altogether?


b) Seema has 55 rings. She gives 29 rings to Reema. How many rings does Seema have left?



c) Robin has 15 green balloons and 25 blue balloons. How many balloons does he have altogether?



d) Make an addition story problem using numbers 53 and 26 and solve the problem by any method.



V) Match the following:

- | | |
|-------------|----|
| a. $35 - 2$ | 53 |
| b. $46 + 7$ | 52 |
| c. $57 - 5$ | 27 |
| d. $23 + 4$ | 33 |

VI) Write the total value.

- a. ₹10 + ₹5 + ₹5 = _____
b. ₹10 + ₹20 + ₹5 = _____

VII) How many 50 Paise coins make 5 Rs. Draw and show.



VIII) $35 + \underline{\hspace{2cm}} = 64$. Use appropriate method to fill in the blanks.

