

NEW AL WUROOD INTERNATIONAL SCHOOL, JEDDAH



(PEEVEES GROUPOF SCHOOLS, K.S.A.)
Affiliated to CBSE – New Delhi.

EVALUATION-3 (2016 – 2017)

Subject: Mathematics

Invigilator's Signature

Date: 05.03.17 Set:A

Time: 2 Hours

Class: I Sec: _____

Max.Marks: 50

Name: _____

Roll No.: _____

SECTION	A	B	C	D	TOTAL MARKS
MAX.MARKS					50
MARKS OBTAINED					
MARKS AFTER SCRUTINY					

Scrutinizer's Signature

Examiner's Signature

Instructions to the Candidates:

1. Please check that this question paper contains all the printed pages.
2. All answers must be written in the space provided.
3. Do not write anything in the margin.
4. Do not leave the examination hall without handing over the answer paper to the invigilator.

I. Write the number names.

(5marks)

a. 100 - 

b. 77 - 

c. 23 - 

d. 6 - 

e. 95 - 

II. Colour the odd one.

(2marks)



III. Fill in the missing number.

(2marks)

a. $14 - \square = 7$





b. $19 - \square = 16$

c. $0 + \square = 11$

d. $12 + \square = 15$

IV. Finish the pattern so that it matches **XYYZXYYZ**.

(2marks)

X	Y	Y	Z	X	Y	Y	Z	X	Y	Y	Z
											

V. Fill in the blanks.

(3marks)

- _____ comes after Thursday.
- A rectangle has _____ sides and _____ corners.
- _____ months are there in a year.

VI. Use pictures to show story problems:

(6marks)

1. $14 + 4 =$ _____

2. $18 - 6 =$ _____

VII. Tick (✓) the correct pattern:

(2marks)



VIII. Solve:

(4marks)

a. $12 + 1 =$ _____
b. $7 + 4 =$ _____

c. $18 - 6 =$ _____
d. $5 - 3 =$ _____

IX. Draw and write a story problem to show $6+7+3$.

(2marks)

X. Make a pattern with the given shapes :

(4marks)

A.



B.



XI. Draw the picture for the story :

(4marks)

A. There are 9 flowers. 3 have bees. How many flowers do not have bees?

B. There are 10 mugs. 6 of them are filled. How many are not filled?

XII. Write the numbers that come next:

(4marks)

a. 5, 10, 15, 20, _____, _____, _____, _____.


b. 2, 4, 6, 8, _____, _____, _____, _____.

XIII. Draw the next 2 shapes in the patterns:

(3marks)

a. ✓ × × ✓ × × _____

b. L M N L M N _____

c. 

XIV. Write the missing month from the help box given below :

(3marks)


January , May , September , November

1. April _____ June
2. _____ February
3. August _____ October

XV. Read the number code and colour neatly:

(4marks)

1-green, 2- brown , 3-yellow,4 -red



Alifor
27/2