



**Subject: Mathematics**

Class: 1

**WORKSHEET -1**

---

**Q1. Subtract by counting back on fingers.**

A.  $9-4=$ \_\_\_\_\_

B.  $6-3=$ \_\_\_\_\_

C.  $7-5=$ \_\_\_\_\_

**Q2. There are 18 beads. 6 beads are lost. How many are left?**

Ans- \_\_\_\_\_

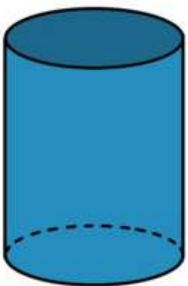
\_\_\_\_\_

**Q3. Will this object roll or slide? Why?**



\_\_\_\_\_

**Q4. Write the name of solid shape and any one feature.**




\_\_\_\_\_

**Q5. Complete the pattern.**




\_\_\_\_\_

**Q6. Write the missing number patterns.**



**Q7. Put a tick ✓ on the correct pattern.**



**Q8. Fill in the blanks.**

1. A square has \_\_\_\_\_ sides and \_\_\_\_\_ corners.

2. A triangle has \_\_\_\_\_ sides and \_\_\_\_\_ corners.

**Q9. Write the addition fact for  $17-5=12$**

Ans- \_\_\_\_\_

**Q10. Write the subtraction facts for  $3+8=11$**

Ans- \_\_\_\_\_

**Q11. Subtract by counting back on a number strip.**

A.  $13-4=$ \_\_\_\_\_



B.  $20-8=$ \_\_\_\_\_



**Q12. There are 17 birds sitting on a tree. 4 of them flew away. How many are left?**

Ans- \_\_\_\_\_

\_\_\_\_\_

\*\*\*\*\*