

# NEW AL WUROOD INTERNATIONAL SCHOOL, JEDDAH

(PEEVEES SCHOOLS, K.S.A.)  
Affiliated to CBSE – New Delhi.



## SUMMATIVE ASSESSMENT – 2 (2016 -2017)

### Subject: SOCIAL SCIENCE

Date: 07/03/2017

Set: A

Duration: 2 ½ Hrs.

Class: 6 Sec:

Max. Marks: 90

Name: \_\_\_\_\_

Roll No. : \_\_\_\_\_

#### Instructions to the Candidates:

1. Please check that this question paper contains all the printed pages.
2. All answers must be written in the provided answer sheet.
3. Read each question carefully and follow the instruction.
4. Do not write anything in the margin.
5. Do not exceed the prescribed word limit while answering the questions.
6. Do not split sections.
7. Q.no.30 and Q.no 42 are map questions, mark the places on the same map.

#### **I. Fill in the Blanks:**

(6x1=6M)

1. \_\_\_\_\_ is an example of a temple built out of one rock.
2. The poem Meghaduta was written by \_\_\_\_\_.
3. Person who belongs to a country by birth is called \_\_\_\_\_.
4. \_\_\_\_\_ and \_\_\_\_\_ are the two principles of democracy.
5. The Antarctic Circle passes through the \_\_\_\_\_ ocean.
6. The \_\_\_\_\_ trench is the deepest point on the Earth.


#### **II. Write True or False. Correct the statements which are False.**

(6x1=6M)

7. The deepest point on the Earth is found in the Atlantic ocean.
8. The Equator is the biggest latitude.
9. Whites in the United States were discriminated by the Blacks.
10. Decisions for the country are taken by a king in a democracy.
11. Puranas are the most translated books.
12. A Kalash is a religious pitcher.

**III. Name the following:**

**(3X1=3M)**



13.

\_\_\_\_\_.



14.

\_\_\_\_\_.



15.

\_\_\_\_\_.

**IV. Answer the following questions in 30 to 40 words**

**(10x2=20M)**

16. How is Stupa different from a monastery?

17. Write about one law that you would want to obey every day. Also write what would happen if they didn't.

18. Why is it important for country like India to have a standard time?

19. Give reasons:

a) The Atlantic is the busiest ocean.

b) There are no permanent settlements in Antarctica.

20. What kind of hardships do you think women faces?

21. Define Universal Adult Franchise.

22. Mention the features of Sarnath Pillar.

23. Give an example of a conflict that can happen between the groups of people living in a democratic country.

24. Which two things should we know to find the exact location of place on Earth?

25. Mention one cause and one consequence of any one natural disaster that you have read about.

**V. Answer the following question in 60 to 80 words**

**(10x3=30M)**

26. Why do you think the rulers used pillars to spread their messages?

27. Write three rules that you have to follow in School.
28. Explain the importance of Oceans.
29. Draw a Venn diagram to show any two differences between the democracy and monarchy and also the similarities.
30. Mark the important latitudes on the map of the world. Make sure to include the degree of the latitude followed by N or S.
31. What can we tell about the people living in Tamil regions from the epic Silappadikaram?
32. Explain the heat zones of the Earth.
33. How do you think Ajanta paintings were made on the rough surface of the caves?
34. Answer in one word: a) The strip of land joining North America to South America.  
b) The continent known as the island continent.  
c) One Indian Research Station in Antarctica.
35. Explain one important features of each of the following: a) The Panchatantra  
b) Monasteries c) Temples.

**VI. Answer the following questions in 100 to 120 words.**

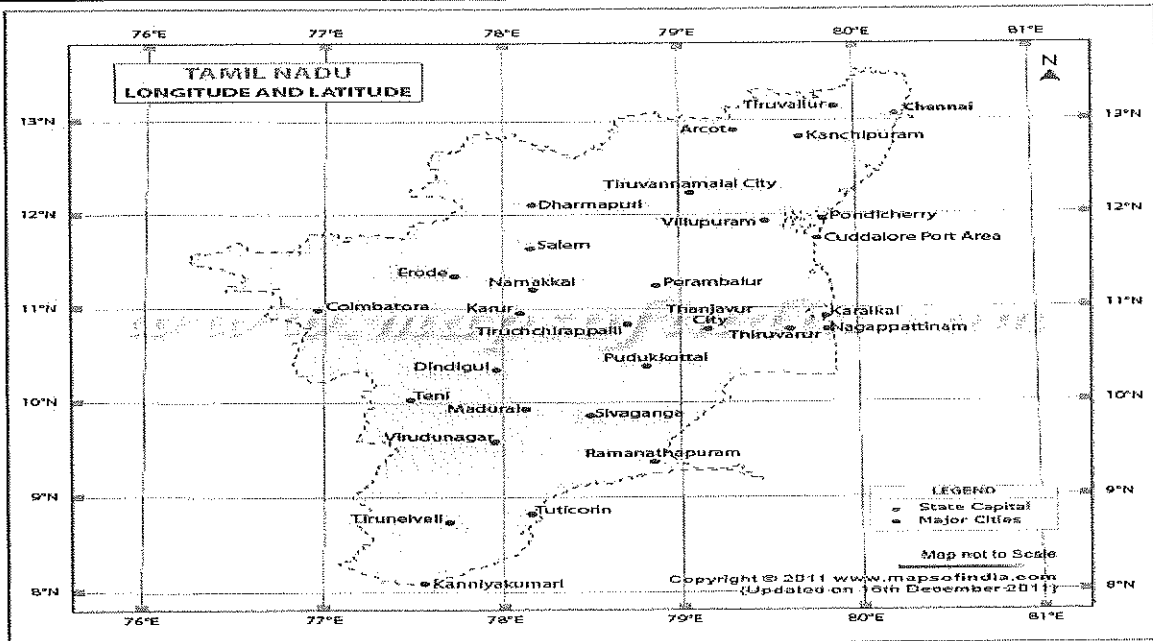
**(8x4=32M)**

36. What in your view was the important reason that people needed to have a Government in earlier times?
37. Name two human activities that disturb the balance between the lithosphere and hydrosphere. Suggest two ways in which we can maintain this intricate balance.
38. Why is the temple of Bhitargaon found in a state of ruin, whereas the temples of the South India have survived many natural calamities?
39. "Conflicts are harmful for society ".Do you agree? Support your answer with reasons.
40. How did Aryabhata's contribution help the traders in trade? How did the Europeans learn about his concepts?
41. Read the following and answer the questions.

The Mahabharata tell us the story of conflict between the Kaurvas and Pandavas, who were the cousins, for the throne of Hastinapur in modern Uttar Pradesh.	The Ramayana narrates the struggle of Rama, the prince of Kosala, who leaves his palaceto spend 14 years in exile in the forestalong with his wife and brother.
---	---

- a) Write one feature each of Mahabharata and Ramayana.
  - b) Any two similarities between both the epics.
42. Mark the following on an outline map of the world.

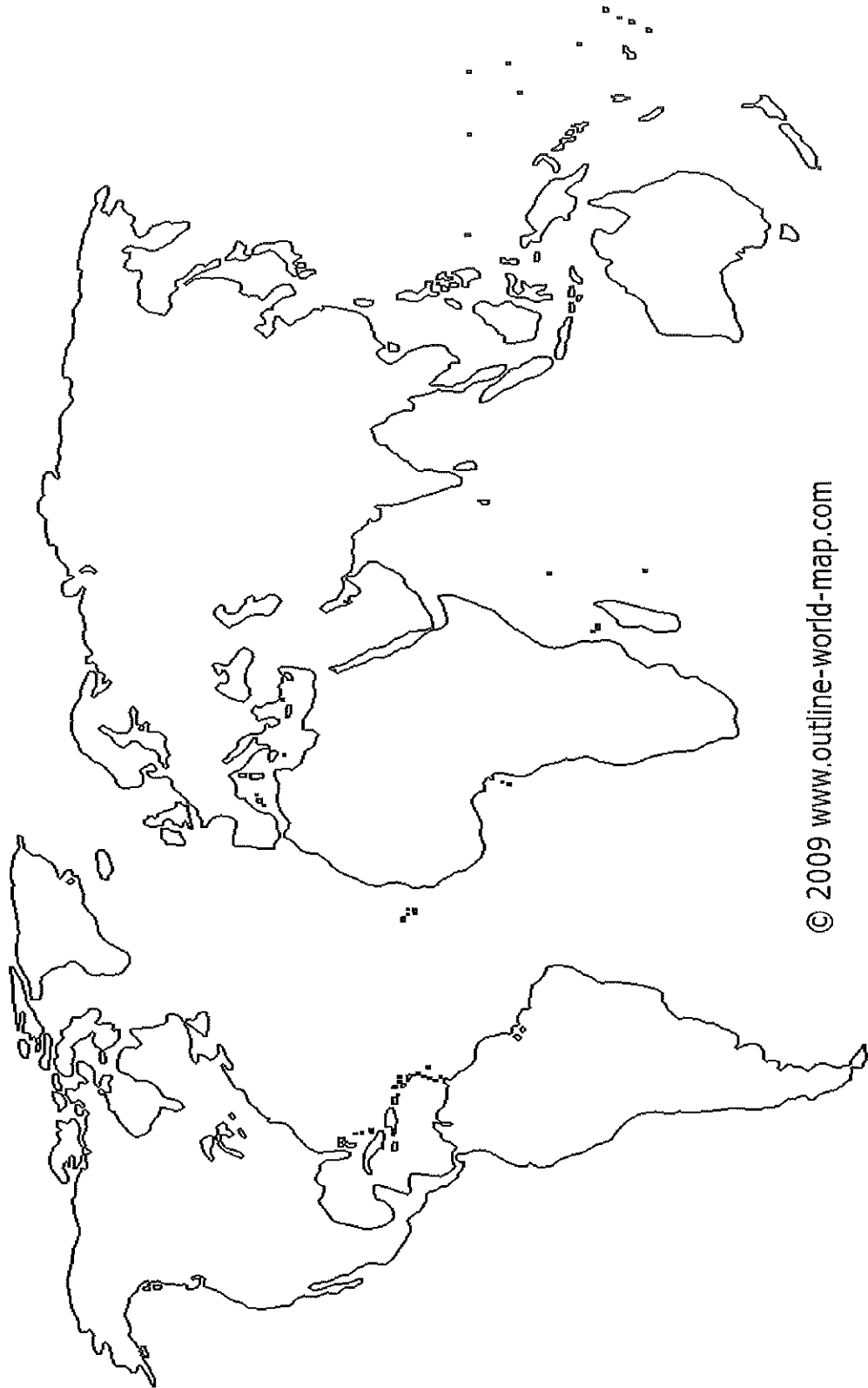
- a) Africa      b) Atlantic Ocean      c) Ural Mountains      d) Australia



43.

Given above is grid showing some important Places of Tamil Nadu?

- a) Karur - \_\_\_\_\_.
- b) Pondicherry - \_\_\_\_\_.
- c) 10° N and 78° E - \_\_\_\_\_.
- d) 11° N and 77° E - \_\_\_\_\_.



© 2009 www.outline-world-map.com

مدرسة الورود الجديدة العالمية بجدة  
قسم البنات  
تحت إشراف وزارة التربية والتعليم  
بجدة ٢٠١٢  
New AL WUROOD INTL SCHOOL-JEDDAH  
Affiliated to CBSE New delhi  
Affiliation No. 573008

