

NEW AL WUROOD INTERNATIONAL SCHOOL, JEDDAH, K.S.A

Affiliated to CBSE – New Delhi, Affiliation No. 5730008



WORKSHEET

GRADE: 6 – ANNUAL EXAMINATION

SUBJECT: Social Science

Blocks-26, 27 & 28

I. Fill in the blanks:

1. A Block Mountain is formed due to _____ processes.
2. The main occupation on plateaus is _____
3. Plains are formed due to 2 external processes _____ and _____
4. Both _____ and _____ are rich reserves of precious stones and metals.
5. _____ fold mountains are high and steep.

II. Name the following:


1. The hill range to the northwest of the Deccan Plateau
2. One east-flowing river in South India.
3. The island group affected by the 2004 tsunami.
4. The hills where the Western Ghats and Eastern Ghats meet.

III. Answer the following:

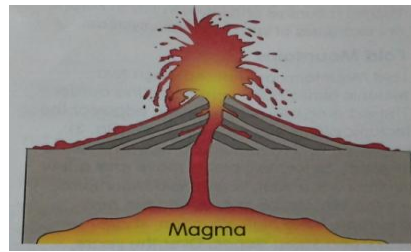
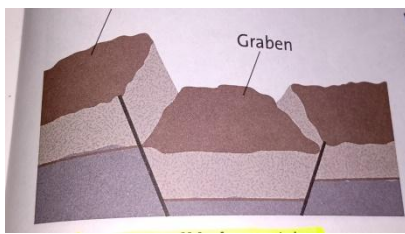
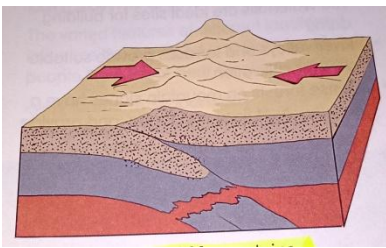
1. Why are plateaus also known as tablelands? Why are plains also known as low lands?
2. What are internal processes? Explain the formation of any 2 landform 2 landforms as a result of internal processes.
3. In 4-5 sentences, explain the formation of the Northern Plains in India.
4. Explain any 1 hazard each faced by people living on the following landforms. Include 1 sentence each explaining how human activities can increase the risk of these hazards
A. Mountains

B. Plains

5. Explain why life in the mountains would be difficult. Explain the features of the Northern Plains. Include details of location. Extent, terrain, river, soil and importance of these plains. Central & South India: Physical Divisions.
6. Write any one difference between the following
 - A. Western Ghats and Eastern Ghats
 - B. Western Coastal Plains and Eastern Coastal Plains
7. Label the different layers of atmosphere and write about their main features.



8. How do the physical divisions of India lead to its diversity in landforms?
9. Write any one difference between the Northern Plains and the Coastal Plains
10. Write any one difference between the Himadri Range and Shiwalik Range
11. Which island group do you think is less influenced by the Indian mainland? Support your answer with two reasons.
12. Identify the mountains and explain about their formation.



13. Mark the following on the given outline map of India.

- A. The Standard Meridian of India
- B. The state in which you live
- C. Western Ghats
- D. Eastern Ghats
- E. The Palk Strait

