



NEW AL WUROOD INTERNATIONAL SCHOOL JEDDAH

B.E.S.T. Group of Schools, K.S.A.

Affiliated to CBSE – New Delhi, Affiliation No: 5730008

EVALUATION-3 March (2022-23)


REVISION WORKSHEET-1

GRADE 2

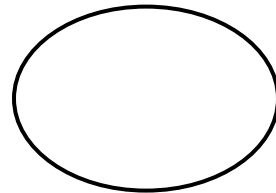
SUBJECT: MATH

1. Write the names of the shapes:

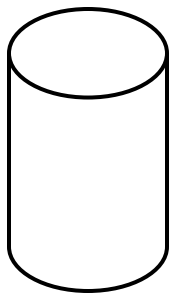
a.




b.



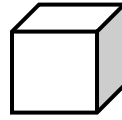

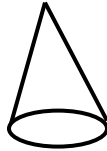

c.



d.



2. Shade the solid shapes:



3. Write the number of sides and corners for the following shapes:

a. Triangle

Sides= _____

Corners= _____

b. Circle

Sides= _____

Corners = _____

c. Square

Sides = _____

Corners = _____

4. Write the number of faces, edges and corners for the following shapes.

a. Pyramid

Faces= _____

Edges= _____

Corners= _____

b. Cylinder

Faces= _____

Edges= _____

Corners= _____

c. Cuboid

Faces= _____

Edges= _____

Corners= _____

d. Sphere

Faces= _____

Edges= _____


Corners= _____

5. Draw a figure using a circle, 2 triangles and 2 squares.

6. Sona has 8 balls. Will she be able to make a tower?

7. Ram has 5 dices. Will he able to make a tower?

8. Count the number of shapes in the given picture.



Square= _____

Rectangle= _____

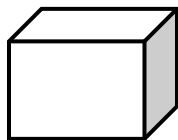
Circle= _____

Oval= _____

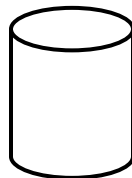
Triangle= _____

9. Tick the shapes that can roll:

a)




b)



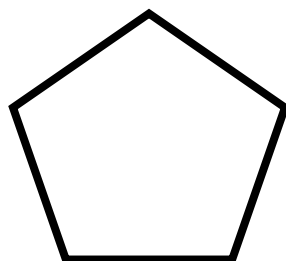
c)



d)



10. Write the number of corners and sides:



Corners= _____

Sides= _____