

NEW AL WUROOD INTERNATIONAL SCHOOL, JEDDAH, K.S.A

Affiliated to CBSE – New Delhi, Affiliation No. 5730008



FIRST TERM EXAMINATION/EVALUATION 1-June,2022-23

WORKSHEET 2

GRADE: 2

SUBJECT: MATH

Q1. Choose the correct answer from the numbers given in the brackets:

1. The successor of 786 is _____ (785 , 788 , 787)
2. The predecessor of 645 is _____ (643 , 644 , 646)
3. Smallest 3 digit number using 1 , 0 , 9 is _____ (190 , 109 , 901)
4. $8 + 7 =$ _____ (6 , 1 , 17)
5. Face value of 5 in 593 is (5 , 50 , 500)

Q2. State whether true or False :

1. 654, 650 , 605 are arranged in decreasing order. _____
2. $963 > 936$ _____
3. 753 has 7 hundreds , 3tens , 5ones _____
4. $903 = 90 + 0 + 3$ _____

Q3. Match the following :

- | | |
|--------------------------------|-----|
| 1. 3 ones, 8 hundreds , 9 tens | 649 |
| 2. $9 - 4 =$ | 921 |
| 3. Six hundred and forty nine | 893 |
| 4. 9 hundred, 1 ones, 2 tens | 5 |

Q4. Count up the number grid to find the answers

1	2	3	4	5
6	7	8	9	10
11	12	13	14	15
16	17	18	19	20

- $13 - 7 = \underline{\hspace{2cm}}$
- $20 - 6 = \underline{\hspace{2cm}}$


Q5. _____
number line .

Mark the numbers 353, 358 ,and 355 on the

350

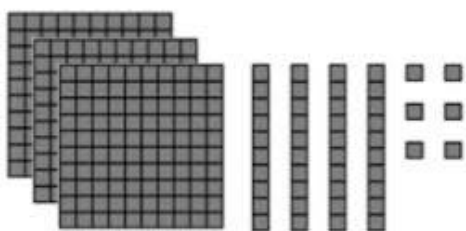
360

Q6. Write the numbers and number names for the following



1. 

_____ = _____




2.

_____ = _____

Q7. Add or Subtract by making 10.

A. $13 - 7$



B. 8 + 6

