

NEW AL WUROOD INTERNATIONAL SCHOOL, JEDDAH, K.S.A

Affiliated to CBSE – New Delhi, Affiliation No. 5730008



WORKSHEET -1

GRADE: 4 – ANNUAL EXAMINATION

SUBJECT: Social Science

I.Fill in the blanks

1. The Thorn forest is found in _____ state.
2. In _____ forests, the trees grow leaves in some season and lose them during other season.
3. Evergreen forests are found in areas where the _____ lot .
4. Mangrove forest grows in _____ water.
5. The _____ forest can be seen in Himalayas.
6. The way of growing crops and keeping animals for food is called _____.
7. The main occupation of people in India is _____.
8. The main food of people living in the eastern and southern parts of our country is _____.
9. The basic material from which different things are made is called _____

II. Identify the pictures and answer the following questions:

10.



A. What kind of road is shown in?

Picture 1: _____

Picture 2: _____

B. Which mode of transport are people using to travel in?

Picture 1: _____

Picture 2: _____

C. Have you ever travelled on a road as shown in picture 1 or 2? Describe something you felt while travelling on it.

III. Answer the following questions:

11. What are the different types of forests in India? Write down name of a tree that you would find in each forest.

12. What would happen if we did not have air and water transport?

13. Read the passage and answer the following :

Sunita and her family live in a small village near a forest. Sunita goes to the forest every day to collect medicinal plants and herbs to make medicines. Her father plucks fruit from the trees for their family. She heard that some people will soon cut the trees in the forest which is against the law. She is very sad.

A. Write any two ways in which deforestation will affect Sunita .

B. Write one way which you can help to protect the forest near Sunita's village.



C. Write one reason why it is important for us to save forests.

14. Describe about Suez canal and Panama canal. How does it help in sea travel?

15. Identify the pictures and write any two differences each.

A

B




A _____ B _____

A _____

B _____

16. Write any two ways in which rail transport is important in India.

18.



Write the main use of each of these water transports.

A. Cargo Ship: _____

B. Cruise Ship: _____

C. Ferry Boat: _____

19 Mark one state for each forest in the given outline map of India.

- A. Ever green forest
- B. Coniferous forest
- C. Mangrove forest
- D. Deciduous forest
- E. Thron forest

