

NEW AL WUROOD INTERNATIONAL SCHOOL, JEDDAH

Affiliated to CBSE – New Delhi, No:5730008



EVALUATION-1,(2018 - 2019)

Subject: MATHEMATICS

Date: 01.07.2018

Set: A

Class: 5

Sec:

Invigilator's Sign

Time: 1½ Hours

Max. Marks:

50

Name: _____

Roll No. : _____

SECTION	A	B	C	D	TOTAL MARKS
MAX.MARKS	10	10	15	15	50
MARKS OBTAINED					
MARKS AFTER SCRUTINY					
<i>Scrutinizer's Signature</i>				<i>Examiner's Signature</i>	

Instructions to the Candidates:

1. Please check that this question paper contains all the printed pages.
2. All answers must be written in the space provided.
3. Do not write anything in the margin.
4. Do not leave the examination hall without handing over the answer paper to the invigilator.

SECTION - A

Fill in the blanks:

(5 x 1 = 5)

- 1) If a number ends in 0, it is divisible by ____ and _____.
- 2) $38,289 + 44,568 =$ _____.
- 3) $7123 \times 4 =$ _____
- 4) The HCF of 12 and 14 is _____
- 5) _____ are fractions that are of the same size.

Choose the correct option:

(5 x 1 = 5)

- 6) $4928 \div 10 =$ _____
a) 4928 b) 4298 c) 492 d) 49280
- 7) $\frac{1}{2}$ of 12 = _____
a) $12\frac{1}{2}$ b) 6 c) 3 d) 12
- 8) Two different fractions with same denominator is called _____
a) Unlike fractions b) unit unlike fraction c) None of these
d) Like fractions
- 9) $98,532 - 20,368 =$ _____
a) 78,164 b) 87,164 c) 78,168 d) 78,165

10) $\frac{1}{4} + \frac{2}{4} =$ _____

a) $\frac{2}{4}$

b) $\frac{4}{4}$

c) $\frac{3}{4}$

d) $\frac{3}{8}$

SECTION – B

(5 x2 = 10)

11) Use box Model to solve the problem : 6264×9

Ans:

X				

12) Find LCM of 3 and 25

Ans:

13) Divide and find quotient and remainder of $900 \div 90$

Ans:

14) A petrol pump sells 3455 Litre of petrol everyday. How many litres of petrol will it sell in 2 weeks ?

Ans:

15) Express $\frac{16}{20}$ to its simplest form

Ans:

SECTION – C


(5 x 3 = 15)

16) Ashwini used $2\frac{1}{2}$ kg sugar in juice and $3\frac{2}{5}$ kg sugar in cake. How much sugar did she use in all ?

Ans:


17) Ahmed earns Rs 43,596 per month .His wife earns Rs. 36,675 per month.If they save Rs .10,678 per month ,How much have they spent in a month ?

Ans:



18) Solve : $2\frac{1}{3} - 1\frac{3}{4}$

Ans:



19) Find the Product :

a) $\frac{4}{9} \times \frac{3}{7}$

b) $200 \times \frac{7}{10}$

Ans:

a)	b)
----	----

20) Divide:

a) $3\frac{1}{5} \div 5\frac{3}{4}$ b) $\frac{4}{3} \div 12$

Ans:

a)	b)
----	----

SECTION – D


(3 x 5 = 15)

21) Which of the following are divisible by 2, 3,5,6,9 and 10? Test the divisibility.

Number	By 2	By 3	By 5	By 6	By 9	By 10
45						
30						
54						
60						
94						
72						


22) Veena want to distribute three-fourth of her birthday cake among her 6 friends equally. How much cake will each friend get ? Draw Diagrams and solve.

Ans:



23) Which is bigger: $\frac{1}{2} \times \frac{1}{3}$ or $\frac{1}{3} \times \frac{1}{4}$. Draw diagrams and solve.

Ans:



***** BEST OF LUCK *****