

NEW AL WUROOD INTERNATIONAL SCHOOL, JEDDAH, K.S.A

Affiliated to CBSE – New Delhi, Affiliation No. 5730008



FIRST TERM EXAMINATION/EVALUATION 1-June,2022-23

WORKSHEET

GRADE:3

SUBJECT: Maths

1. Choose the correct options to complete the sentences

46, 55, 43

Sid used 14 oranges and 32 sweet limes to make juice. He used _____ fruits in total to make juice.

2. There were 78 cars in the parking lot. 29 cars drove away. How many cars are left in the parking lot now?

3. Write a word problem on adding the numbers 234 and 344.

4. Add.

A. $366 + 465$

	H	T	O
	3	6	6
+	4	6	5

B. $579 + 284$

	H	T	O
	5	7	9
+	2	8	4

5. Choose if True or False.

A. The sum of 628 and 30 is 658.

B. $156 + 700 = 856$.

6. Samar made 145 candles. He sold all of them. How many candles does he have left now?
Write if True or False.

A. Total number of candles Samar made is 143.

B. The total number of candles and that were sold by him is equal to the number of candles he made.

7. Choose if True or False.

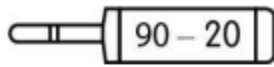
A. The sum of 3 and 8 is 10.

B. The sum of 6 and 5 is 12.

C. The sum of 8 and 9 is 17.

D. The sum of 1 and 0 is 0.

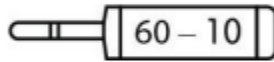
8. Match the subtraction fact with the correct answer.

 $90 - 20$

.

.


50

 $60 - 10$

.

.

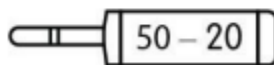
40

 $80 - 40$

.

.

70

 $50 - 20$

.

.

30

9.

59 49 60 92

Fill in the blanks.

A. $56 - 7 =$ _____

B. $67 - 8 =$ _____

C. $98 - 6 =$ _____

D. $69 - 9 =$ _____

10. Ram had 43 seashells. He collected 35 more. How many does he have in total now.

11. Write a word problem for $678 - 238$

12

The table lists the prices of some items. Answer the questions. !

Item	Cost
Bottle	₹85
Book	₹56
Pencil box	₹19
Pen	₹15

A What is the total cost of the bottle and the pencil box?

B What is the total cost of the book and the pen?