

NEW AL WUROOD INTERNATIONAL SCHOOL, JEDDAH, K.S.A

Affiliated to CBSE – New Delhi, Affiliation No. 5730008



FIRST TERM EXAMINATION/EVALUATION 1-June,2022-23

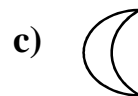
WORKSHEET: 2

GRADE: 1

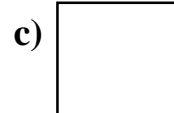

SUBJECT: MATHS

I. Choose the correct answer:

1. Circle the object with curved line.



2. Circle the triangle.



3. How many clocks are there?




a) 4

b) 3

c) 5

4. How many rectangles are there in the picture?



a) 3

b) 5

c) 6

5. $6 + 2 =$ _____

a) 8

b) 6

c) 4

II. Match the following:



Sphere



Cube



Cuboid





Cone

III. Fill in the blanks:



1. There are _____ caps. 

2. The triangle has _____ sides.

3. $4 + 4 =$ _____.

4.  +  = _____

IV. Answer the following:

1.  and  _____ rockets and _____ rockets is _____ rockets altogether.

2. Name 2 things that are circle.

1. _____

2. _____

3. Complete the table :

Object	Roll	Slide	Both roll and slide
Watermelon			
Book			
Can			

4. Name any 2 solid shapes.

1. _____

2. _____

5. Add:

$$\begin{array}{r} 7 \\ + 2 \\ \hline \end{array}$$

$$\begin{array}{r} 5 \\ + 3 \\ \hline \end{array}$$

6. Create a story problem for $5 + 2 = 7$.

X-----X-----X