

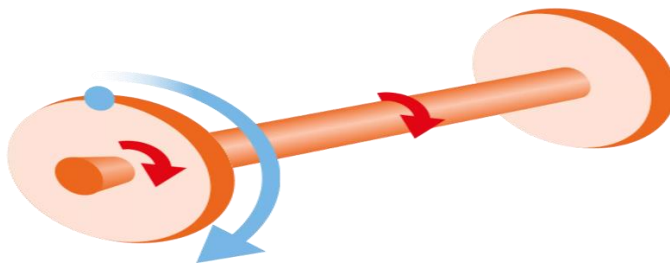


EVALUATION-3 March, 2022 -23

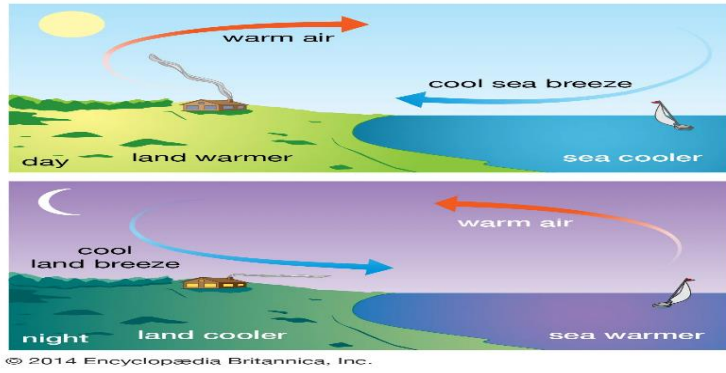
WORKSHEET-1

GRADE: 5

SUBJECT: SCIENCE

SL.NO.		MARKS
I	<i>Fill in the blanks with suitable option from brackets:</i>	
1	The input force in a simple machine is known as.....(load/effort)	
2	Sound of a guitar is.....(pleasant/unpleasant) to ears.	
3	Niya put the chocolate inside her.....(transparent/opaque) bag so that brother would not find them.	
4	A flag pole is an example of.....(inclined plane/pulley)	
5	Shincy's hair dries up after she takes a bath due to(evaporation/boiling)	
6	(Warm/Cool) air rises as it is lighter	
II	<i>Identify the image and write any one relevant fact about it:</i>	
1		

2



3



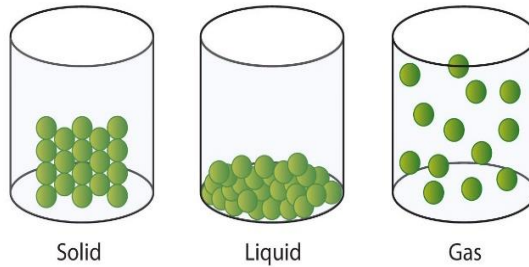
4



5



<p>III</p> <p>1</p> <p>2</p> <p>3</p> <p>4</p> <p>5</p>	<p><i>State true or false:</i></p> <p>Cool air moves to take the place of warm air in the atmosphere.</p> <p>Solids are highly compressible than that of liquids.</p> <p>The darkest part of a shadow is called penumbra.</p> <p>Sound wave can travel through vacuum.</p> <p>Crane is an example for complex machine.</p>	
<p>IV</p> <p>1</p> <p>2</p> <p>3</p> <p>4</p> <p>5</p>	<p><i>Find the correct word:</i></p> <p>idcnelin :</p> <p>sntvbiroai :</p> <p>daohws :</p> <p>osnlouti :</p> <p>tehpmsareo :</p>	
<p>V</p> <p>1.</p>	<p><i>Read the following paragraph and answer the following questions based on it:</i></p> <p>Anything that has mass and space to occupy is called matter. Matter can be classified to three, such as solid, liquid, and gas.</p>	



- a) On which bases matter classified into three?
- b) Observe the above pictures any find the highly rigid form of matter.
- c) An inflated balloon can be formed into different shapes. Why?

2. Light plays important role in our lives as it enables to see things. Materials can be classified into the following order

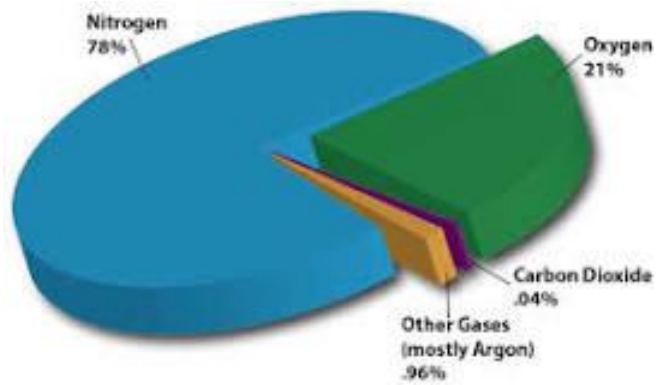


- a) Which kind of material can be used for vehicles?
- b) Which kind of materials used for making money purse?
- c) Which kind of material used for making windows?

3

The earth is surrounded by an envelope of air. Air

contains mixture of gases.



- a) Write any one use of nitrogen gas.
- b) Oxygen is an essential gas for living things. Why?
- c) Which one of the above gas is help to balance the temperature of the earth.