






Subject: Science
Worksheet 2

Class: III

I. Complete the following table

IDENTIFY THE BEAK	SHAPE OF THE BEAK	USE OF THE BEAK
		
		
		

II. Click true or false for the following statements

1. Parrot has a straw like long beak to drink nectar.
2. Home of the birds are called as Den.
3. The feet and claws help the bird to walk, wade through water and catch food.

IV. Identify the picture and write about it



1. Which bird does not built it's nest but lay eggs in the nest of crow?

3. What helps the insects to feel?

4. Which type of feathers are close to body of birds?

5. Sweet juice made by plants to attract insects and birds?

VI. Complete the sentences by looking at the pictures



1) _____ helps in movement _____ helps it moves.



2) Cockroach move _____ with the help of _____ and _____.

VII- Write the short answers:

1. Write the different movements of insects.





VIII-Give one reason for the following:

1. Earthworms called as farmer's friend.

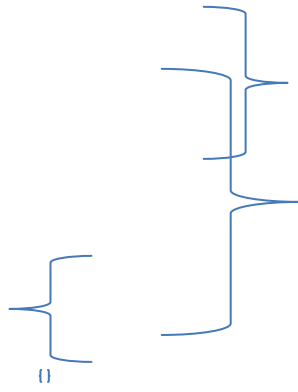
2. Many birds built their nest on the tree but peahen and duck build their nest on the ground.

IX- Identify and describe the following picture from the following.



1) _____

2)



3

