

NEW AL WUROOD INTERNATIONAL SCHOOL, JEDDAH

Affiliated to CBSE – New Delhi, Affiliation No: 5730008



Evaluation -3 March, 2022-23

Worksheet 2

GRADE 3

SUBJECT: MATHEMATICS

1) Circle these dates on calendar.

A. 27 december

December 2022

Sun	Mon	Tue	Wed	Thu	Fri	Sat
				1	2	3
4	5	6	7	8	9	10
11	12	13	14	15	16	17
18	19	20	21	22	23	24
25	26	27	28	29	30	31

B. 9 december

2) Read the time on clock and write it. (Half past, quarter to, quarter past)



A.



B.

3) _____ is the 8th calendar month

4) 60 minutes = _____ hours

5) 120 hours = _____ days

6) on the timeline mark the sports events that happened during the week

Monday-Football

Wednesday-cricket

Thursday-hockey

Sunday-Table tennis

7) Match the following

A. Leap year

A.168 hours

B.24 hours

B.18:00

C.february

C.1 day

D. 7 days

D.28 or 29 weeks

E. 6:00 pm

E.366 days

8) Convert the time given in 12- hour format to the 24-hour format.

A.8:00 am = _____

B. 5:00 pm= _____

c.12:00 am=_____

D. 10:00 pm=_____


9) sam travelled from one city to another in 6 days.how many hours did it take her to travel between the cities?

10) Riya slept for 6 hours during the day.how many minutes did she slept?


11)Draw the minute hand and hour hand to show

A.quarter to 10

B.half past 4


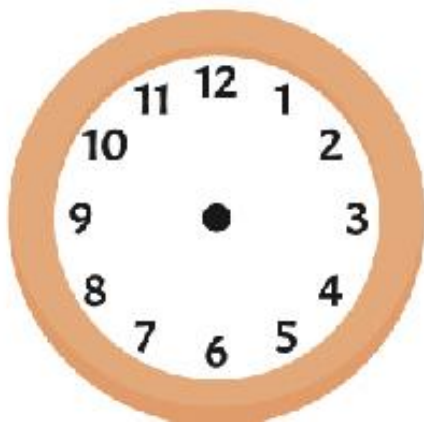


C. quarter past 2



D.12:00 o'clock

12)The date of birth on birth certificate is 25-2-2010 what will be the age of the person in the year 2022?



13) if the person is 5 years old in 2015, what is the birth year?

14)) how many total days are there in march ,April and may?

15)Look at the birth certificate and fill in the blanks.



A. The date of birth of the child is _____

B. Rani was born in Delhi _____(TRUE/FALSE)