

NEW AL WUROOD INTERNATIONAL SCHOOL, JEDDAH, K.S.A

Affiliated to CBSE - New Delhi, Affiliation No. 5730008



FIRST TERM EXAMINATION/EVALUATION 1-June,2022-23

WORKSHEET 1

GRADE: 2

SUBJECT: MATH

Q1. Choose the correct answer from the numbers given in the brackets:

1. The successor of 654 is _____ (655 , 653, 657)
2. The predecessor of 362 is _____ (363 , 361 , 360)
3. Smallest 3 digit number using 6 , 0 , 7 is _____ (607 , 760 , 670)
4. $9 + 5 =$ _____ (6 , 4 , 14)
5. Face value of 9 in 943 is (9 , 90 , 900)

Q2. State whether true or False :

1. 896, 894, 809 are arranged in decreasing order. _____
2. $781 > 871$ _____
3. 568 has 8 hundreds , 6tens , 8ones _____
4. $507 = 50 + 0 + 8$ _____

Q3. Match the following :

- | | |
|--------------------------------|-----|
| 1. 7 ones, 8 hundreds , 9 tens | 346 |
| 2. $7 - 4 =$ | 768 |
| 3. Three hundred and forty six | 1 |
| 4. 7 hundred, 8 ones, 6 tens | 3 |

Q4. Count up the number grid to find the answers

1	2	3	4	5
6	7	8	9	10
11	12	13	14	15
16	17	18	19	20

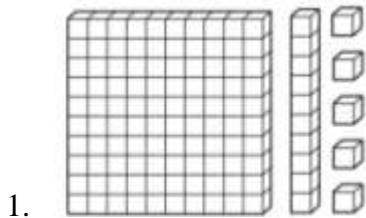
- $15 - 8 = \underline{\hspace{2cm}}$
- $18 - 5 = \underline{\hspace{2cm}}$

Q5. Mark the numbers 456, 459, and 452 on the number line .

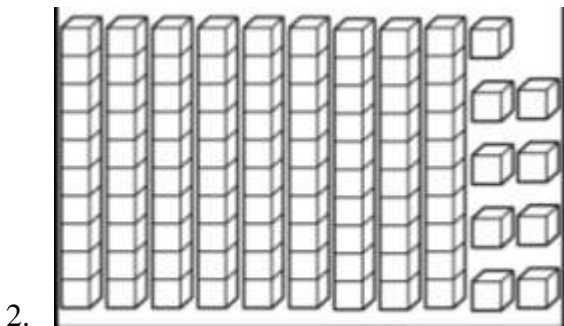
450

460

Q6. Write the numbers and number names for the following



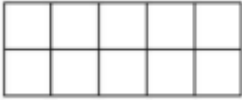
$\underline{\hspace{2cm}} = \underline{\hspace{2cm}}$



$\underline{\hspace{2cm}} = \underline{\hspace{2cm}}$

Q7. Add or Subtract by making 10.

A. $12 - 6$



B. $9 + 4$

